

Number Shape Addition to 20

Use the number shapes to work out the answers to each addition question.

$$\begin{array}{|c|} \hline \text{6 circles} \\ \hline \end{array} + \begin{array}{|c|} \hline \text{2 circles} \\ \hline \end{array} = \square$$




$$\begin{array}{|c|} \hline \text{6 circles} \\ \hline \end{array} + \begin{array}{|c|} \hline \text{3 circles} \\ \hline \end{array} = \square$$




$$\begin{array}{|c|} \hline \text{5 circles} \\ \hline \end{array} + \begin{array}{|c|} \hline \text{4 circles} \\ \hline \end{array} = \square$$


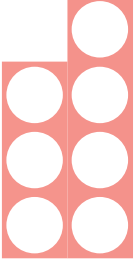

$$\begin{array}{|c|} \hline \text{7 circles} \\ \hline \end{array} + \begin{array}{|c|} \hline \text{4 circles} \\ \hline \end{array} = \square$$




$$\begin{array}{|c|} \hline \text{8 circles} \\ \hline \end{array} + \begin{array}{|c|} \hline \text{1 circle} \\ \hline \end{array} = \square$$




$$\begin{array}{|c|} \hline \text{8 circles} \\ \hline \end{array} + \begin{array}{|c|} \hline \text{2 circles} \\ \hline \end{array} = \square$$




 $+$  $=$ 




 $+$  $=$ 

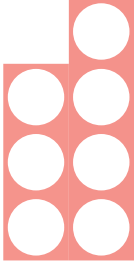


 $+$  $=$ 




 $+$  $=$ 




 $+$  $=$ 




 $+$  $=$ 



 $+$  $=$ 

 $+$  $=$ 

 $+$  $=$ 

 $+$  $=$ 

 $+$  $=$ 

 $+$  $=$ 